






レベル3
復習



レベル3
復習




レベル4



100円が5まい


$$\square \text{円} \times \square \text{まい} = \square \text{円}$$



100円が4まい と 50円が2まい

$$\square \times \square = \square \quad \square \times \square = \square$$

$$\square + \square = \square$$



100円が3まいと 50円が2まいと 10円が10まい

$$\square \times \square = \square \quad \square \times \square = \square \quad \square \times \square = \square$$




$$\square + \square + \square = \square$$

問題



-
-
-

問題



問題

買える？ 買えない？



120円



120円



120円



×

=



おつり

-

