







レベル1の
復習



レベル1の
復習



レベル2



10円が5まい


$$\square \text{円} \times \square \text{まい} = \square \text{円}$$



10円が4まい と 5円が2まい

$$\square \times \square = \square \quad \square \times \square = \square$$

$$\square + \square = \square$$






10円が3まいと5円が2まいと1円が10まい

$$\square \times \square = \square \quad \square \times \square = \square \quad \square \times \square = \square$$

$$\square + \square + \square = \square$$

問題



問題



問題

