





レベル2の
復習



レベル2の
復習



レベル3



50円が2まい

$$\square \text{円} \times \square \text{まい} = \square \text{円}$$



10円が5まい と 50円が1まい

$$\square \times \square = \square \quad \square \times \square = \square$$

$$\square + \square = \square$$






10円が3まいと5円が4まいと50円が1まい



$$\square \times \square = \square \quad \square \times \square = \square \quad \square \times \square = \square$$

$$\square + \square + \square = \square$$

問題



問題



問題

